

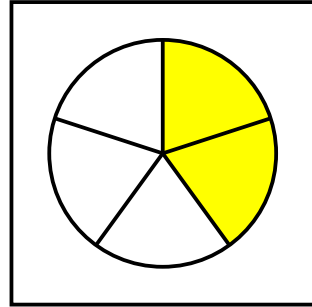
Mit Brüchen rechnen

Nimm dir eine Karte und lege den Bruch nach. Kontrolliere auf der Rückseite!
Schreibe die gelösten Brüche in dein Heft. Wenn du willst kannst du auch eigene Rechnungen erfinden.

www.lernfroschat.com

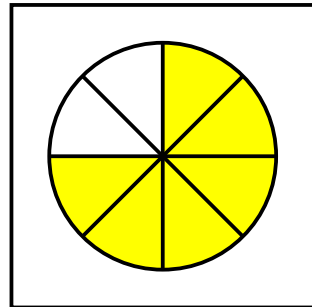
$$\frac{4}{5} - \frac{2}{5}$$

www.lernfroschat.com



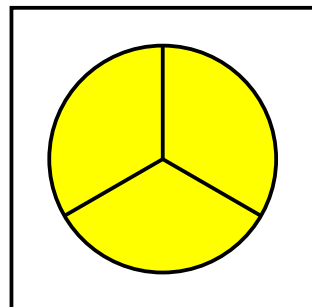
$$\frac{1}{8} + \frac{5}{8}$$

www.lernfroschat.com



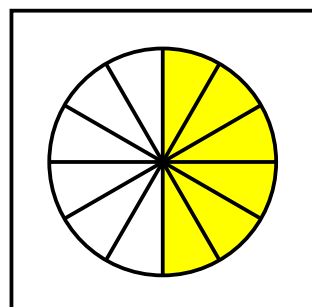
$$\frac{1}{3} + \frac{2}{3}$$

www.lernfroschat.com



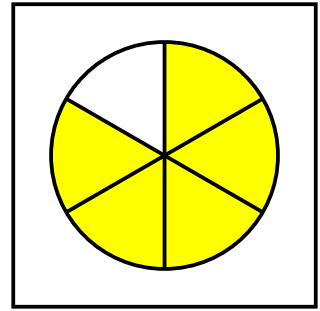
$$\frac{11}{12} - \frac{5}{12}$$

www.lernfroschat.com



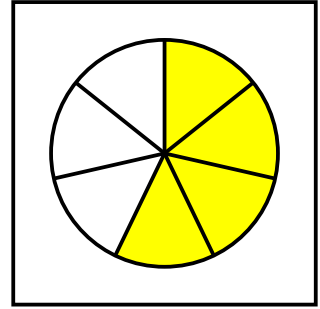
$$\frac{2}{6} + \frac{3}{6}$$

www.lernfrosch.de



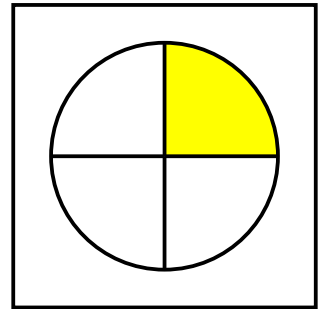
$$\frac{5}{7} - \frac{1}{7}$$

www.lernfrosch.de



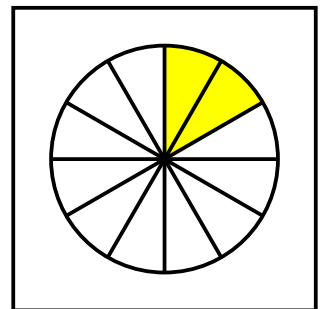
$$\frac{4}{4} - \frac{3}{4}$$

www.lernfrosch.de



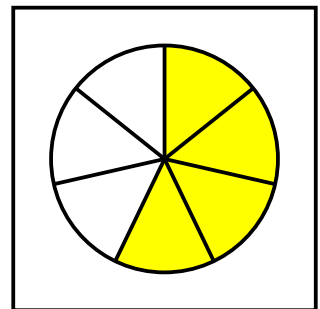
$$\frac{10}{12} - \frac{8}{12}$$

www.lernfrosch.de



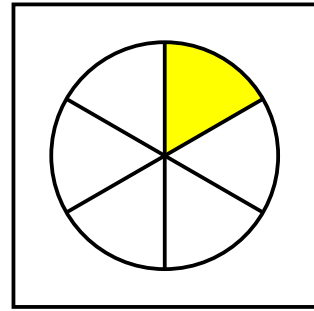
$$\frac{3}{7} + \frac{1}{7}$$

www.lernfrosch.de



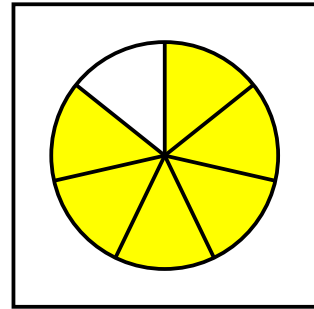
$$\frac{6}{6} - \frac{5}{6}$$

www.lernfroschat



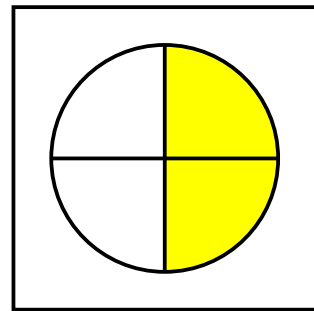
$$\frac{3}{7} + \frac{3}{7}$$

www.lernfroschat



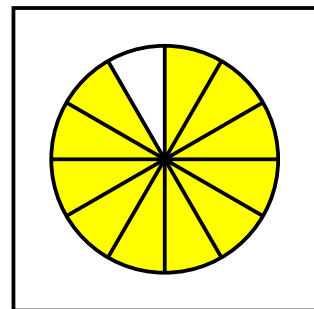
$$\frac{3}{4} - \frac{1}{4}$$

www.lernfroschat



$$\frac{2}{12} + \frac{9}{12}$$

www.lernfroschat



$$\frac{5}{7} + \frac{2}{7}$$

www.lernfroschat

